


Right hand notes

Study these notes until you know them well
Try naming the notes without using FACE or EGBDF

R H spaces




A musical staff with a treble clef. Four whole notes are placed in the spaces of the staff. Below each note is its letter name: F, A, C, and E.

2 Write, name + play



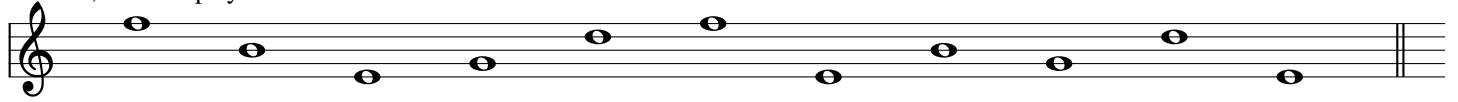
A musical staff with a treble clef. Seven whole notes are placed in the spaces of the staff, corresponding to the notes F, A, C, E, F, A, and C.

3 R H lines




A musical staff with a treble clef. Five whole notes are placed on the lines of the staff. Below each note is its letter name: E, G, B, D, and F.

4 Write, name + play




A musical staff with a treble clef. Ten whole notes are placed on the lines of the staff, corresponding to the notes E, G, B, D, F, G, B, D, F, and E.

5 R H lines + spaces



A musical staff with a treble clef. Eleven whole notes are placed across the staff, alternating between lines and spaces. Below each note is its letter name: C, D, E, F, G, A, B, C, D, E, and F.

6 Write, name + play



A musical staff with a treble clef. Eleven whole notes are placed across the staff, alternating between lines and spaces, corresponding to the notes C, D, E, F, G, A, B, C, D, E, and F.